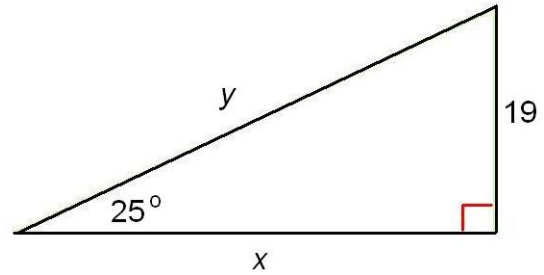


DIRECTIONS: Use the sine (sin), cosine (cos), and tangent (tan) ratios to solve for x and y in the following right triangles. Round your answers to the nearest tenth (one decimal place). Show all work.

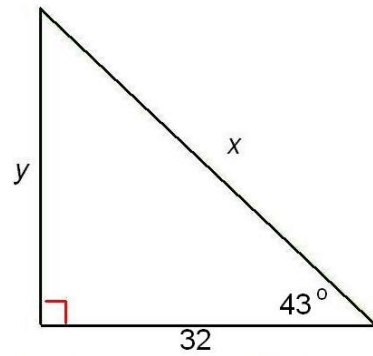
1. $x =$ _____

$y =$ _____



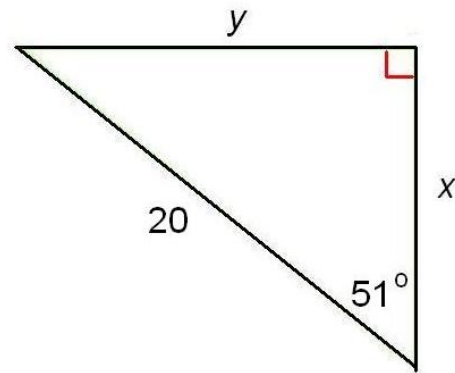
2. $x =$ _____

$y =$ _____



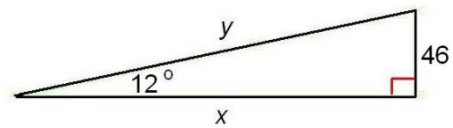
3. $x =$ _____

$y =$ _____



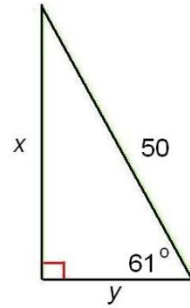
4. $x =$ _____

$y =$ _____



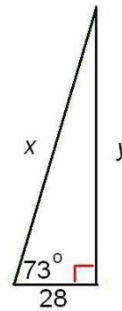
5. $x =$ _____

$y =$ _____



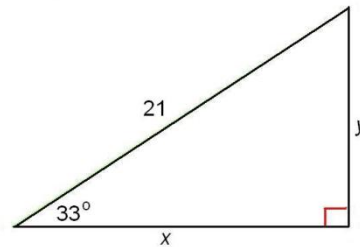
6. $x =$ _____

$y =$ _____



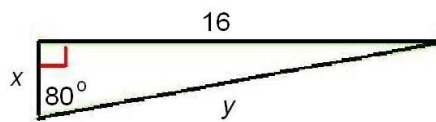
7. $x =$ _____

$y =$ _____



8. $x =$ _____

$y =$ _____



9. $x =$ _____

$y =$ _____

